







NOME: _____

DATA: _____

CAPÍTULO 16 - 1º ANO: ADIÇÃO E SUBTRAÇÃO COM 10 E COM 0

1. ESCREVA OS NÚMEROS QUE FALTAM NOS QUADRINHOS.

①			$4 - \square = \square$
②			$\square - \square = \square$
③			$\square - \square = \square$

2. SE VOCÊ COMER 4, QUANTOS SOBAM?

しき

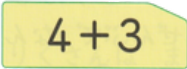
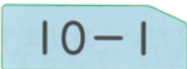
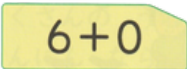
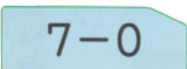
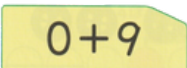
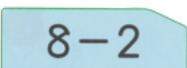
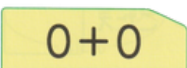
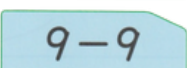
こたえ () に



3. VAMOS FAZER CONTAS BEM RÁPIDAS.

- | | |
|-------------------------------|-------------------------------|
| ① $7+0=$ <input type="text"/> | ② $8+0=$ <input type="text"/> |
| ③ $0+3=$ <input type="text"/> | ④ $0+0=$ <input type="text"/> |
| ⑤ $5-5=$ <input type="text"/> | ⑥ $6-0=$ <input type="text"/> |
| ⑦ $3-0=$ <input type="text"/> | ⑧ $0-0=$ <input type="text"/> |


4. LIGUE COM UMA LINHA OS CARTÕES QUE TÊM O MESMO RESULTADO.

	•	•	
	•	•	
	•	•	
	•	•	

5. HÁ 8 MAÇÃS. SE VOCÊ COMER 8, QUANTAS SOBAM?

しき

こたえ () に



FOLHA RESPOSTA

1. QUESTÃO

① $4 - 0 = 4$

② $3 - 3 = 0$

③ $2 - 0 = 2$

2. QUESTÃO

しき $4 - 4 = 0$

こたえ (0) こ

3. QUESTÃO

① $7 + 0 = 7$

② $8 + 0 = 8$

③ $0 + 3 = 3$

④ $0 + 0 = 0$

⑤ $5 - 5 = 0$

⑥ $6 - 0 = 6$

⑦ $3 - 0 = 3$

⑧ $0 - 0 = 0$

4. QUESTÃO

$4 + 3$

$10 - 1$

$6 + 0$

$7 - 0$

$0 + 9$

$8 - 2$

$0 + 0$

$9 - 9$

5. QUESTÃO

しき $8 - 8 = 0$

こたえ (0) こ